

The University of the State of New York
REGENTS HIGH SCHOOL EXAMINATION

ALGEBRA 2/TRIGONOMETRY

Wednesday, January 25, 2012 — 1:15 to 4:15 p.m., only

Student Name: _____

School Name: _____

Print your name and the name of your school on the lines above. Then turn to the last page of this booklet, which is the answer sheet for Part I. Fold the last page along the perforations and, slowly and carefully, tear off the answer sheet. Then fill in the heading of your answer sheet.

This examination has four parts, with a total of 39 questions. You must answer all questions in this examination. Write your answers to the Part I multiple-choice questions on the separate answer sheet. Write your answers to the questions in Parts II, III, and IV directly in this booklet. All work should be written in pen, except graphs and drawings, which should be done in pencil. Clearly indicate the necessary steps, including appropriate formula substitutions, diagrams, graphs, charts, etc.

The formulas that you may need to answer some questions in this examination are found at the end of the examination. This sheet is perforated so you may remove it from this booklet.

Scrap paper is not permitted for any part of this examination, but you may use the blank spaces in this booklet as scrap paper. A perforated sheet of scrap graph paper is provided at the end of this booklet for any question for which graphing may be helpful but is not required. You may remove this sheet from this booklet. Any work done on this sheet of scrap graph paper will not be scored.

When you have completed the examination, you must sign the statement printed at the end of the answer sheet, indicating that you had no unlawful knowledge of the questions or answers prior to the examination and that you have neither given nor received assistance in answering any of the questions during the examination. Your answer sheet cannot be accepted if you fail to sign this declaration.

Notice...

A graphing calculator and a straightedge (ruler) must be available for you to use while taking this examination.

The use of any communications device is strictly prohibited when taking this examination. If you use any communications device, no matter how briefly, your examination will be invalidated and no score will be calculated for you.

DO NOT OPEN THIS EXAMINATION BOOKLET UNTIL THE SIGNAL IS GIVEN.

Part I

Answer all 27 questions in this part. Each correct answer will receive 2 credits. No partial credit will be allowed. For each question, write on the separate answer sheet the numeral preceding the word or expression that best completes the statement or answers the question. [54]

Use this space for
computations.

1 The yearbook staff has designed a survey to learn student opinions on how the yearbook could be improved for this year. If they want to distribute this survey to 100 students and obtain the most reliable data, they should survey

- (1) every third student sent to the office
- (2) every third student to enter the library
- (3) every third student to enter the gym for the basketball game
- (4) every third student arriving at school in the morning

2 What is the sum of the first 19 terms of the sequence 3, 10, 17, 24, 31, ...?

- (1) 1188
- (2) 1197
- (3) 1254
- (4) 1292

3 Which expression, when rounded to three decimal places, is equal to -1.155 ?

- (1) $\sec\left(\frac{5\pi}{6}\right)$
- (2) $\tan(49^\circ 20')$
- (3) $\sin\left(-\frac{3\pi}{5}\right)$
- (4) $\csc(-118^\circ)$

4 If $f(x) = 4x - x^2$ and $g(x) = \frac{1}{x}$, then $(f \circ g)\left(\frac{1}{2}\right)$ is equal to

- (1) $\frac{4}{7}$
- (2) -2
- (3) $\frac{7}{2}$
- (4) 4

Use this space for computations.

5 A population of rabbits doubles every 60 days according to the formula $P = 10(2)^{\frac{t}{60}}$, where P is the population of rabbits on day t .

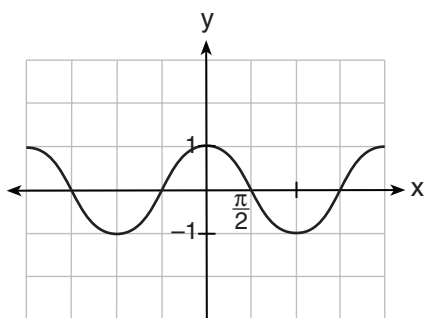
What is the value of t when the population is 320?

- (1) 240 (3) 660
(2) 300 (4) 960

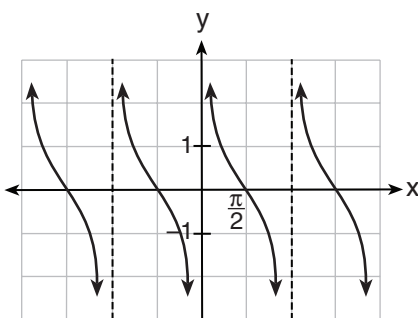
6 What is the product of $\left(\frac{x}{4} - \frac{1}{3}\right)$ and $\left(\frac{x}{4} + \frac{1}{3}\right)$?

- (1) $\frac{x^2}{8} - \frac{1}{9}$ (3) $\frac{x^2}{8} - \frac{x}{6} - \frac{1}{9}$
(2) $\frac{x^2}{16} - \frac{1}{9}$ (4) $\frac{x^2}{16} - \frac{x}{6} - \frac{1}{9}$

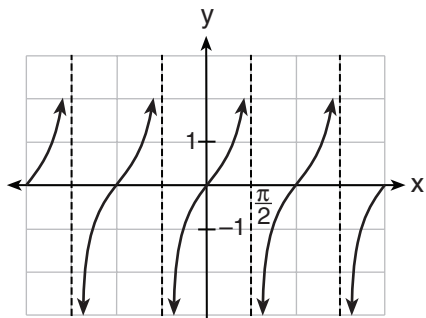
7 Which is a graph of $y = \cot x$?



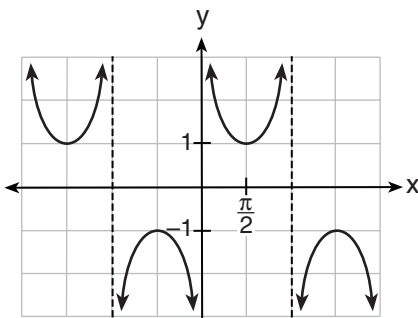
(1)



(3)



(2)



(4)

**Use this space for
computations.**

8 Which expression always equals 1?

- (1) $\cos^2 x - \sin^2 x$ (3) $\cos x - \sin x$
(2) $\cos^2 x + \sin^2 x$ (4) $\cos x + \sin x$

9 What are the sum and product of the roots of the equation $6x^2 - 4x - 12 = 0$?

- (1) sum = $-\frac{2}{3}$; product = -2
(2) sum = $\frac{2}{3}$; product = -2
(3) sum = -2 ; product = $\frac{2}{3}$
(4) sum = -2 ; product = $-\frac{2}{3}$

10 Given $\triangle ABC$ with $a = 9$, $b = 10$, and $m\angle B = 70$, what type of triangle can be drawn?

- (1) an acute triangle, only
(2) an obtuse triangle, only
(3) both an acute triangle and an obtuse triangle
(4) neither an acute triangle nor an obtuse triangle

11 When $x^{-1} + 1$ is divided by $x + 1$, the quotient equals

- (1) 1 (3) x
(2) $\frac{1}{x}$ (4) $-\frac{1}{x}$

**Use this space for
computations.**

12 If the amount of time students work in any given week is normally distributed with a mean of 10 hours per week and a standard deviation of 2 hours, what is the probability a student works between 8 and 11 hours per week?

- (1) 34.1% (3) 53.2%
(2) 38.2% (4) 68.2%

13 What is the conjugate of $\frac{1}{2} + \frac{3}{2}i$?

- (1) $-\frac{1}{2} + \frac{3}{2}i$ (3) $\frac{3}{2} + \frac{1}{2}i$
(2) $\frac{1}{2} - \frac{3}{2}i$ (4) $-\frac{1}{2} - \frac{3}{2}i$

14 Given angle A in Quadrant I with $\sin A = \frac{12}{13}$ and angle B in Quadrant II with $\cos B = -\frac{3}{5}$, what is the value of $\cos(A - B)$?

- (1) $\frac{33}{65}$ (3) $\frac{63}{65}$
(2) $-\frac{33}{65}$ (4) $-\frac{63}{65}$

15 Which expression represents the third term in the expansion of $(2x^4 - y)^3$?

- (1) $-y^3$ (3) $6x^4y^2$
(2) $-6x^4y^2$ (4) $2x^4y^2$

Use this space for
computations.

16 What is the solution set of the equation $3x^5 - 48x = 0$?

- (1) $\{0, \pm 2\}$ (3) $\{0, \pm 2, \pm 2i\}$
(2) $\{0, \pm 2, 3\}$ (4) $\{\pm 2, \pm 2i\}$

17 A sequence has the following terms: $a_1 = 4, a_2 = 10, a_3 = 25, a_4 = 62.5$.
Which formula represents the n th term in this sequence?

- (1) $a_n = 4 + 2.5n$ (3) $a_n = 4(2.5)^n$
(2) $a_n = 4 + 2.5(n - 1)$ (4) $a_n = 4(2.5)^{n-1}$

18 In parallelogram $BFLO$, $OL = 3.8$, $LF = 7.4$, and $m\angle O = 126$.
If diagonal \overline{BL} is drawn, what is the area of $\triangle BLF$?

- (1) 11.4 (3) 22.7
(2) 14.1 (4) 28.1

19 Which statement about the graph of the equation $y = e^x$ is *not* true?

- (1) It is asymptotic to the x -axis.
(2) The domain is the set of all real numbers.
(3) It lies in Quadrants I and II.
(4) It passes through the point $(e, 1)$.

20 What is the number of degrees in an angle whose measure is 2 radians?

- (1) $\frac{360}{\pi}$ (3) 360
(2) $\frac{\pi}{360}$ (4) 90

**Use this space for
computations.**

21 A spinner is divided into eight equal sections. Five sections are red and three are green. If the spinner is spun three times, what is the probability that it lands on red *exactly* twice?

(1) $\frac{25}{64}$

(3) $\frac{75}{512}$

(2) $\frac{45}{512}$

(4) $\frac{225}{512}$

22 What is the range of $f(x) = |x - 3| + 2$?

(1) $\{x|x \geq 3\}$

(3) $\{x|x \in \text{real numbers}\}$

(2) $\{y|y \geq 2\}$

(4) $\{y|y \in \text{real numbers}\}$

23 Which calculator output shows the strongest linear relationship between x and y ?

(1) Lin Reg

$$\begin{aligned}y &= a + bx \\a &= 59.026 \\b &= 6.767 \\r &= .8643\end{aligned}$$

(3) Lin Reg

$$\begin{aligned}y &= a + bx \\a &= 2.45 \\b &= .95 \\r &= .6022\end{aligned}$$

(2) Lin Reg

$$\begin{aligned}y &= a + bx \\a &= .7 \\b &= 24.2 \\r &= .8361\end{aligned}$$

(4) Lin Reg

$$\begin{aligned}y &= a + bx \\a &= -2.9 \\b &= 24.1 \\r &= -.8924\end{aligned}$$

24 If $\log x^2 - \log 2a = \log 3a$, then $\log x$ expressed in terms of $\log a$ is equivalent to

(1) $\frac{1}{2}\log 5a$

(3) $\log 6 + \log a$

(2) $\frac{1}{2}\log 6 + \log a$

(4) $\log 6 + 2\log a$

Use this space for
computations.

25 Which function is one-to-one?

(1) $f(x) = |x|$

(3) $f(x) = x^2$

(2) $f(x) = 2^x$

(4) $f(x) = \sin x$

26 If p varies inversely as q , and $p = 10$ when $q = \frac{3}{2}$, what is the value of p when $q = \frac{3}{5}$?

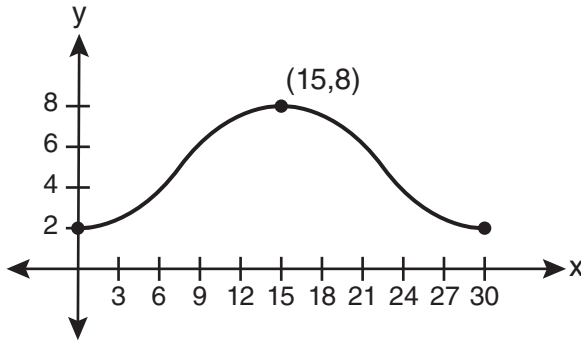
(1) 25

(3) 9

(2) 15

(4) 4

27 Which equation is graphed in the diagram below?



(1) $y = 3\cos\left(\frac{\pi}{30}x\right) + 8$

(3) $y = -3\cos\left(\frac{\pi}{30}x\right) + 8$

(2) $y = 3\cos\left(\frac{\pi}{15}x\right) + 5$

(4) $y = -3\cos\left(\frac{\pi}{15}x\right) + 5$

Part II

Answer all 8 questions in this part. Each correct answer will receive 2 credits. Clearly indicate the necessary steps, including appropriate formula substitutions, diagrams, graphs, charts, etc. For all questions in this part, a correct numerical answer with no work shown will receive only 1 credit. All answers should be written in pen, except for graphs and drawings, which should be done in pencil. [16]

28 Find the solution of the inequality $x^2 - 4x > 5$, algebraically.

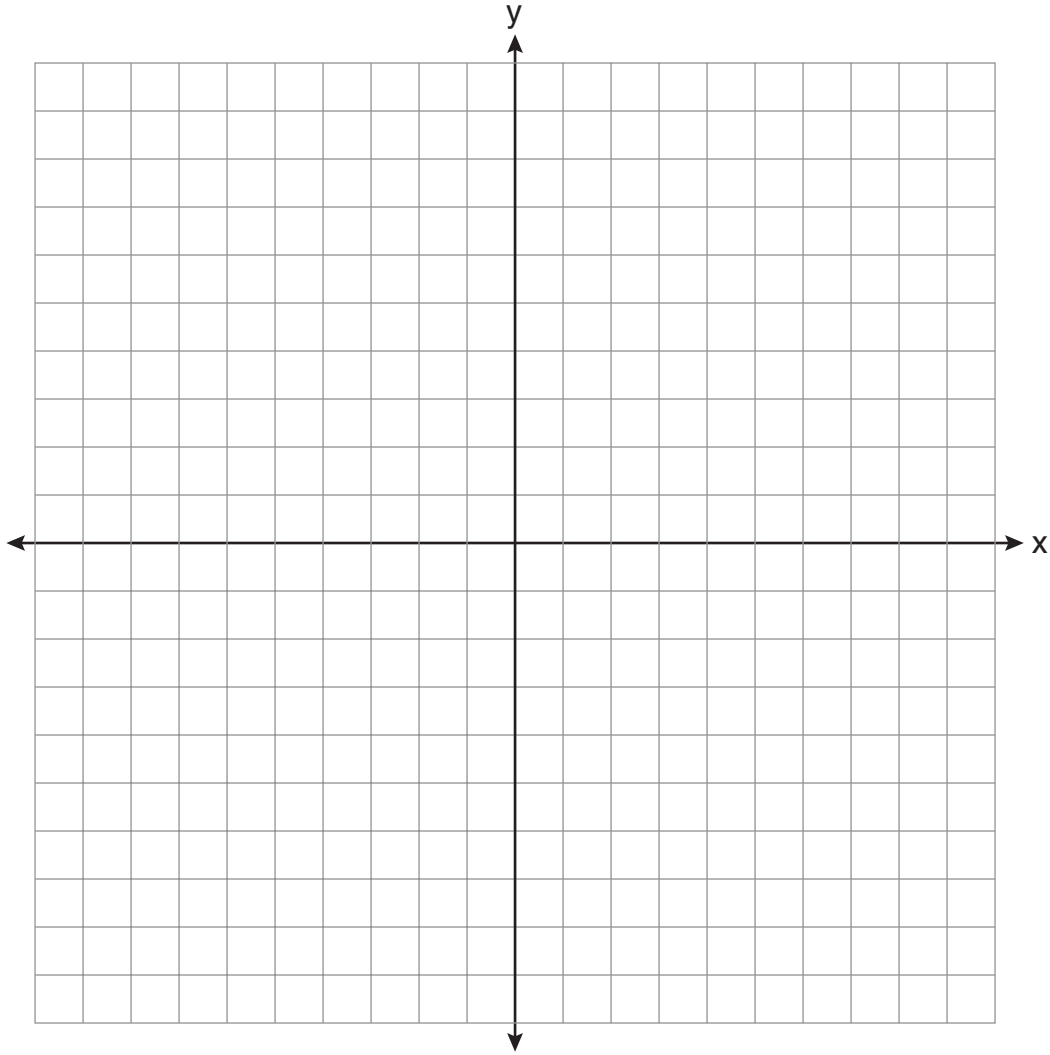
29 Solve algebraically for x : $4 - \sqrt{2x - 5} = 1$

30 Evaluate: $\sum_{n=1}^3 (-n^4 - n)$

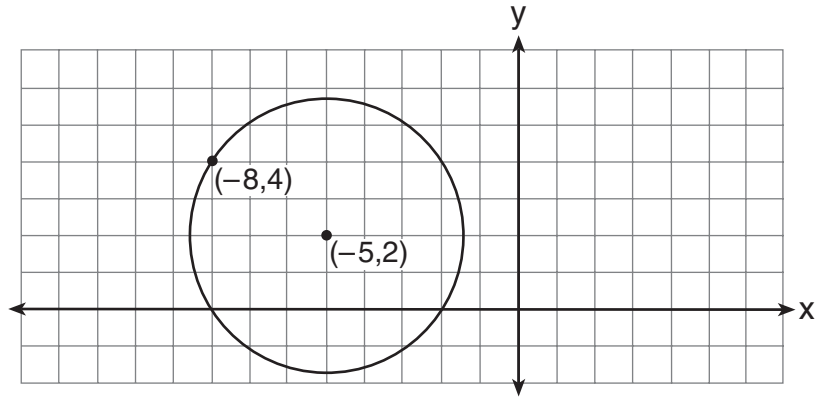
31 Express in simplest form: $\sqrt[3]{\frac{a^6 b^9}{-64}}$

32 A blood bank needs twenty people to help with a blood drive. Twenty-five people have volunteered. Find how many different groups of twenty can be formed from the twenty-five volunteers.

33 On the axes below, for $-2 \leq x \leq 2$, graph $y = 2^{x+1} - 3$.



34 Write an equation of the circle shown in the diagram below.

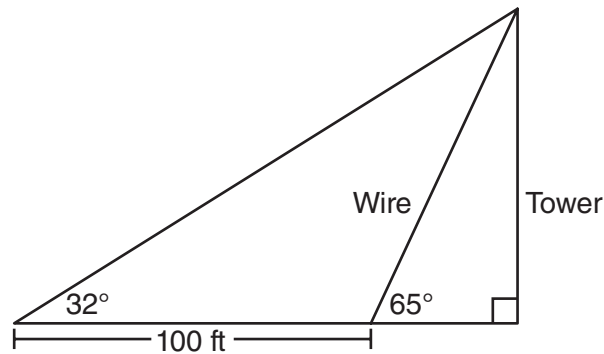


35 Express the exact value of $\csc 60^\circ$, with a rational denominator.

Part III

Answer all 3 questions in this part. Each correct answer will receive 4 credits. Clearly indicate the necessary steps, including appropriate formula substitutions, diagrams, graphs, charts, etc. For all questions in this part, a correct numerical answer with no work shown will receive only 1 credit. All answers should be written in pen, except for graphs and drawings, which should be done in pencil. [12]

- 36 The diagram below shows the plans for a cell phone tower. A guy wire attached to the top of the tower makes an angle of 65 degrees with the ground. From a point on the ground 100 feet from the end of the guy wire, the angle of elevation to the top of the tower is 32 degrees. Find the height of the tower, to the *nearest foot*.



37 If $\log_4 x = 2.5$ and $\log_y 125 = -\frac{3}{2}$, find the numerical value of $\frac{x}{y}$, in simplest form.

38 A population of single-celled organisms was grown in a Petri dish over a period of 16 hours. The number of organisms at a given time is recorded in the table below.

Time, hrs (x)	Number of Organisms (y)
0	25
2	36
4	52
6	68
8	85
10	104
12	142
16	260

Determine the exponential regression equation model for these data, rounding all values to the nearest *ten-thousandth*.

Using this equation, predict the number of single-celled organisms, to the nearest *whole number*, at the end of the 18th hour.

Part IV

Answer the question in this part. A correct answer will receive 6 credits. Clearly indicate the necessary steps, including appropriate formula substitutions, diagrams, graphs, charts, etc. A correct numerical answer with no work shown will receive only 1 credit. The answer should be written in pen. [6]

39 Perform the indicated operations and simplify completely:

$$\frac{x^3 - 3x^2 + 6x - 18}{x^2 - 4x} \cdot \frac{2x - 4}{x^4 - 3x^3} \div \frac{x^2 + 2x - 8}{16 - x^2}$$

Reference Sheet

Area of a Triangle

$$K = \frac{1}{2} ab \sin C$$

Functions of the Sum of Two Angles

$$\sin(A + B) = \sin A \cos B + \cos A \sin B$$

$$\cos(A + B) = \cos A \cos B - \sin A \sin B$$

$$\tan(A + B) = \frac{\tan A + \tan B}{1 - \tan A \tan B}$$

Functions of the Difference of Two Angles

$$\sin(A - B) = \sin A \cos B - \cos A \sin B$$

$$\cos(A - B) = \cos A \cos B + \sin A \sin B$$

$$\tan(A - B) = \frac{\tan A - \tan B}{1 + \tan A \tan B}$$

Law of Sines

$$\frac{a}{\sin A} = \frac{b}{\sin B} = \frac{c}{\sin C}$$

Sum of a Finite Arithmetic Series

$$S_n = \frac{n(a_1 + a_n)}{2}$$

Binomial Theorem

$$(a + b)^n = {}_n C_0 a^n b^0 + {}_n C_1 a^{n-1} b^1 + {}_n C_2 a^{n-2} b^2 + \dots + {}_n C_n a^0 b^n$$

$$(a + b)^n = \sum_{r=0}^n {}_n C_r a^{n-r} b^r$$

Law of Cosines

$$a^2 = b^2 + c^2 - 2bc \cos A$$

Functions of the Double Angle

$$\sin 2A = 2 \sin A \cos A$$

$$\cos 2A = \cos^2 A - \sin^2 A$$

$$\cos 2A = 2 \cos^2 A - 1$$

$$\cos 2A = 1 - 2 \sin^2 A$$

$$\tan 2A = \frac{2 \tan A}{1 - \tan^2 A}$$

Functions of the Half Angle

$$\sin \frac{1}{2} A = \pm \sqrt{\frac{1 - \cos A}{2}}$$

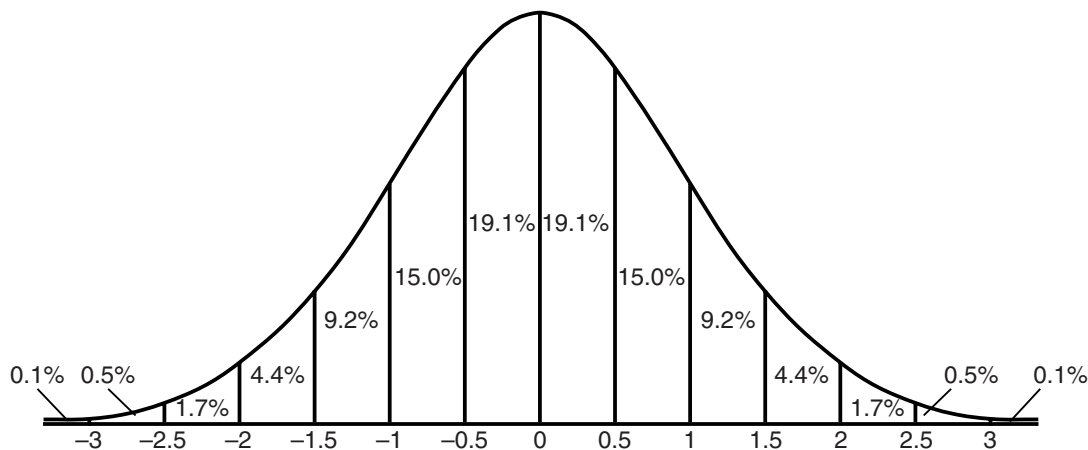
$$\cos \frac{1}{2} A = \pm \sqrt{\frac{1 + \cos A}{2}}$$

$$\tan \frac{1}{2} A = \pm \sqrt{\frac{1 - \cos A}{1 + \cos A}}$$

Sum of a Finite Geometric Series

$$S_n = \frac{a_1(1 - r^n)}{1 - r}$$


Normal Curve Standard Deviation



Tear Here

Tear Here


Scrap Graph Paper — This sheet will *not* be scored.



Tear Here

Tear Here

Scrap Graph Paper — This sheet will *not* be scored.



Tear Here

Tear Here

The University of the State of New York
REGENTS HIGH SCHOOL EXAMINATION

ALGEBRA 2/TRIGONOMETRY

Wednesday, January 25, 2012 — 1:15 to 4:15 p.m., only

ANSWER SHEET

Student Sex: Male Female Grade

Teacher School

Your answers to Part I should be recorded on this answer sheet.

Part I

Answer all 27 questions in this part.

- | | | | |
|---------|----------|----------|----------|
| 1 | 8 | 15 | 22 |
| 2 | 9 | 16 | 23 |
| 3 | 10 | 17 | 24 |
| 4 | 11 | 18 | 25 |
| 5 | 12 | 19 | 26 |
| 6 | 13 | 20 | 27 |
| 7 | 14 | 21 | |

Your answers for Parts II, III, and IV should be written in the test booklet.

The declaration below must be signed when you have completed the examination.

I do hereby affirm, at the close of this examination, that I had no unlawful knowledge of the questions or answers prior to the examination and that I have neither given nor received assistance in answering any of the questions during the examination.

Signature

ALGEBRA 2/TRIGONOMETRY

ALGEBRA 2/TRIGONOMETRY			
Question	Maximum Credit	Credits Earned	Rater's/Scorer's Initials
Part I 1–27	54		
Part II 28	2		
29	2		
30	2		
31	2		
32	2		
33	2		
34	2		
35	2		
Part III 36	4		
37	4		
38	4		
Part IV 39	6		
Maximum Total	88		

Rater's/Scorer's Name (minimum of three)

Total Raw Score

Checked by

Scale Score
(from conversion chart)

Tear Here

Tear Here

FOR TEACHERS ONLY

The University of the State of New York

REGENTS HIGH SCHOOL EXAMINATION

ALGEBRA 2/TRIGONOMETRY

Wednesday, January 25, 2012 — 1:15 to 4:15 p.m., only

SCORING KEY AND RATING GUIDE

Mechanics of Rating

The following procedures are to be followed for scoring student answer papers for the Regents Examination in Algebra 2/Trigonometry. More detailed information about scoring is provided in the publication *Information Booklet for Scoring the Regents Examinations in Mathematics*.

Do *not* attempt to correct the student's work by making insertions or changes of any kind. In rating the open-ended questions, you may make check marks in the exam booklet to indicate student errors. If the students were given scannable answer sheets for the multiple-choice questions, be careful not to make any stray marks on the answer sheet that might later interfere with the accuracy of the scanning.

Unless otherwise specified, mathematically correct variations in the answers will be allowed. Units need not be given when the wording of the questions allows such omissions.

Each student's answer paper is to be scored by a minimum of three mathematics teachers. No one teacher is to score more than approximately one-third of the open-ended questions on a student's paper. On the back of the student's detachable answer sheet, raters must enter their initials in the boxes next to the questions they have scored and also write their name in the box under the heading "Rater's/Scorer's Name."

Schools are not permitted to rescore any of the open-ended questions on this exam after each question has been rated once, regardless of the final exam score. Schools are required to ensure that the raw scores have been added correctly and that the resulting scale score has been determined accurately.

Raters should record the student's scores for all questions and the total raw score on the student's detachable answer sheet. Then the student's total raw score should be converted to a scale score by using the conversion chart that will be posted on the Department's web site at: <http://www.p12.nysed.gov/apda/> on Wednesday, January 25, 2012. Because scale scores corresponding to raw scores in the conversion chart may change from one administration to another, it is crucial that, for each administration, the conversion chart provided for that administration be used to determine the student's final score. The student's scale score should be entered in the box provided on the student's detachable answer sheet. The scale score is the student's final examination score.

Part I

Allow a total of 54 credits, 2 credits for each of the following. Allow credit if the student has written the correct answer instead of the numeral 1, 2, 3, or 4.

(1) 4	(8) 2	(15) 3	(22) 2
(2) 3	(9) 2	(16) 3	(23) 4
(3) 1	(10) 1	(17) 4	(24) 2
(4) 4	(11) 2	(18) 1	(25) 2
(5) 2	(12) 3	(19) 4	(26) 1
(6) 2	(13) 2	(20) 1	(27) 4
(7) 3	(14) 1	(21) 4	

Updated information regarding the rating of this examination may be posted on the New York State Education Department's web site during the rating period. Check this web site at: <http://www.p12.nysed.gov/apda/> and select the link "Scoring Information" for any recently posted information regarding this examination. This site should be checked before the rating process for this examination begins and several times throughout the Regents Examination period.

General Rules for Applying Mathematics Rubrics

I. General Principles for Rating

The rubrics for the constructed-response questions on the Regents Examination in Algebra 2/Trigonometry are designed to provide a systematic, consistent method for awarding credit. The rubrics are not to be considered all-inclusive; it is impossible to anticipate all the different methods that students might use to solve a given problem. Each response must be rated carefully using the teacher's professional judgment and knowledge of mathematics; all calculations must be checked. The specific rubrics for each question must be applied consistently to all responses. In cases that are not specifically addressed in the rubrics, raters must follow the general rating guidelines in the publication *Information Booklet for Scoring the Regents Examinations in Mathematics*, use their own professional judgment, confer with other mathematics teachers, and/or contact the State Education Department for guidance. During each Regents Examination administration period, rating questions may be referred directly to the Education Department. The contact numbers are sent to all schools before each administration period.

II. Full-Credit Responses

A full-credit response provides a complete and correct answer to all parts of the question. Sufficient work is shown to enable the rater to determine how the student arrived at the correct answer.

When the rubric for the full-credit response includes one or more examples of an acceptable method for solving the question (usually introduced by the phrase "such as"), it does not mean that there are no additional acceptable methods of arriving at the correct answer. Unless otherwise specified, mathematically correct alternative solutions should be awarded credit. The only exceptions are those questions that specify the type of solution that must be used; e.g., an algebraic solution or a graphic solution. A correct solution using a method other than the one specified is awarded half the credit of a correct solution using the specified method.

III. Appropriate Work

Full-Credit Responses: The directions in the examination booklet for all the constructed-response questions state: "Clearly indicate the necessary steps, including appropriate formula substitutions, diagrams, graphs, charts, etc." The student has the responsibility of providing the correct answer **and** showing how that answer was obtained. The student must "construct" the response; the teacher should not have to search through a group of seemingly random calculations scribbled on the student paper to ascertain what method the student may have used.

Responses With Errors: Rubrics that state "Appropriate work is shown, but ..." are intended to be used with solutions that show an essentially complete response to the question but contain certain types of errors, whether computational, rounding, graphing, or conceptual. If the response is incomplete; i.e., an equation is written but not solved or an equation is solved but not all of the parts of the question are answered, appropriate work has **not** been shown. Other rubrics address incomplete responses.

IV. Multiple Errors

Computational Errors, Graphing Errors, and Rounding Errors: Each of these types of errors results in a 1-credit deduction. Any combination of two of these types of errors results in a 2-credit deduction. No more than 2 credits should be deducted for such mechanical errors in any response. The teacher must carefully review the student's work to determine what errors were made and what type of errors they were.

Conceptual Errors: A conceptual error involves a more serious lack of knowledge or procedure. Examples of conceptual errors include using the incorrect formula for the area of a figure, choosing the incorrect trigonometric function, or multiplying the exponents instead of adding them when multiplying terms with exponents. A response with one conceptual error can receive no more than half credit.

If a response shows repeated occurrences of the same conceptual error, the student should not be penalized twice. If the same conceptual error is repeated in responses to other questions, credit should be deducted in each response.

If a response shows two (or more) different major conceptual errors, it should be considered completely incorrect and receive no credit.

If a response shows one conceptual error and one computational, graphing, or rounding error, the teacher must award credit that takes into account both errors; i.e., awarding half credit for the conceptual error and deducting 1 credit for each mechanical error (maximum of two deductions for mechanical errors).

Part II

For each question, use the specific criteria to award a maximum of 2 credits. Unless otherwise specified, mathematically correct alternative solutions should be awarded appropriate credit.

(28) [2] “ $x < -1$ or $x > 5$ ”, or an equivalent interval notation, and appropriate algebraic work is shown.

[1] Appropriate work is shown, but one computational or factoring error is made.

or

[1] Appropriate work is shown, but one conceptual error is made, such as not representing the solution as a disjunction.

or

[1] Appropriate work is shown, but only one correct inequality is found.

or

[1] “ $x < -1$ or $x > 5$ ”, but a method other than algebraic is used.

or

[1] “ $x < -1$ or $x > 5$ ”, but no work is shown.

[0] A zero response is completely incorrect, irrelevant, or incoherent or is a correct response that was obtained by an obviously incorrect procedure.

(29) [2] 7, and appropriate algebraic work is shown.

[1] Appropriate work is shown, but one computational error is made.

or

[1] Appropriate work is shown, but one conceptual error is made.

or

[1] 7, but a method other than an algebraic method is used.

or

[1] 7, but no work is shown.

[0] A zero response is completely incorrect, irrelevant, or incoherent or is a correct response that was obtained by an obviously incorrect procedure.

(30) [2] -104 , and appropriate work is shown.

[1] Appropriate work is shown, but one computational error is made.

or

[1] Appropriate work is shown, but one conceptual error is made.

or

[1] -104 , but no work is shown.

[0] A zero response is completely incorrect, irrelevant, or incoherent or is a correct response that was obtained by an obviously incorrect procedure.

(31) [2] $-\frac{a^2b^3}{4}$

[1] One computational or simplification error is made.

or

[1] One conceptual error is made.

[0] A zero response is completely incorrect, irrelevant, or incoherent or is a correct response that was obtained by an obviously incorrect procedure.

- (32) [2] 53,130, and appropriate work is shown.
- [1] Appropriate work is shown, but one computational error is made.
- or**
- [1] Appropriate work is shown, but one conceptual error is made, such as evaluating ${}_{25}P_{20}$.
- or**
- [1] ${}_{25}C_{20}$ or an equivalent expression, but no further correct work is shown.
- or**
- [1] 53,130, but no work is shown.
- [0] ${}_{25}P_{20}$ is stated, but no further work is shown.
- or**
- [0] A zero response is completely incorrect, irrelevant, or incoherent or is a correct response that was obtained by an obviously incorrect procedure.
- (33) [2] A correct graph is drawn.
- [1] One graphing error is made.
- or**
- [1] One conceptual error is made.
- [0] A zero response is completely incorrect, irrelevant, or incoherent or is a correct response that was obtained by an obviously incorrect procedure.

(34) [2] $(x + 5)^2 + (y - 2)^2 = 13$, and appropriate work is shown.

[1] Appropriate work is shown, but one computational error is made.

or

[1] Appropriate work is shown, but one conceptual error is made.

or

[1] Appropriate work is shown to find the radius, but no further work is shown.

or

[1] $(x + 5)^2 + (y - 2)^2 = 13$, but no work is shown.

[0] A zero response is completely incorrect, irrelevant, or incoherent or is a correct response that was obtained by an obviously incorrect procedure.

(35) [2] $\frac{2\sqrt{3}}{3}$, and appropriate work is shown.

[1] Appropriate work is shown, but one computational error is made.

or

[1] Appropriate work is shown, but one conceptual error is made, such as not expressing the answer with a rational denominator.

or

[1] $\frac{2\sqrt{3}}{3}$, but no work is shown.

[0] A zero response is completely incorrect, irrelevant, or incoherent or is a correct response that was obtained by an obviously incorrect procedure.

Part III

For each question, use the specific criteria to award a maximum of 4 credits. Unless otherwise specified, mathematically correct alternative solutions should be awarded appropriate credit.

- (36) [4] 88, and appropriate work is shown.
- [3] Appropriate work is shown, but one computational or rounding error is made.
- [2] Appropriate work is shown, but two or more computational or rounding errors are made.
- or*
- [2] Appropriate work is shown, but one conceptual error is made.
- or*
- [2] The hypotenuse of one of the right triangles is found correctly, but no further correct work is shown.
- [1] Appropriate work is shown, but one conceptual error and one computational or rounding error are made.
- or*
- [1] 88, but no work is shown.
- [0] The obtuse triangle is treated as a right triangle.
- or*
- [0] A zero response is completely incorrect, irrelevant, or incoherent or is a correct response that was obtained by an obviously incorrect procedure.

- (37) [4] 800, and appropriate work is shown.
- [3] Appropriate work is shown, but one computational or simplification error is made.
- or**
- [3] Appropriate work is shown to find both x and y , but no further correct work is shown.
- [2] Appropriate work is shown, but two or more computational or simplification errors are made.
- or**
- [2] Appropriate work is shown, but one conceptual error is made.
- or**
- [2] Appropriate work is shown to find y , but no further correct work is shown.
- [1] Appropriate work is shown, but one conceptual error and one computational or simplification error are made.
- or**
- [1] Appropriate work is shown to find x , but no further correct work is shown.
- or**
- [1] 800, but no work is shown.
- [0] A zero response is completely incorrect, irrelevant, or incoherent or is a correct response that was obtained by an obviously incorrect procedure.

- (38) [4] $y = 27.2025(1.1509)^x$ and 341, and appropriate work is shown.
- [3] Appropriate work is shown, but one computational or rounding error is made.
- or***
- [3] The expression $27.2025(1.1509)^x$ is written and 341, and appropriate work is shown.
- or***
- [3] $y = 27.2025(1.1509)^x$ and 341, but no work is shown.
- [2] Appropriate work is shown, but two or more computational or rounding errors are made.
- or***
- [2] Appropriate work is shown, but one conceptual error is made.
- or***
- [2] The expression $27.2025(1.1509)^x$ is written and 341, but no work is shown.
- or***
- [2] $y = 27.2025(1.1509)^x$, but no further correct work is shown.
- or***
- [2] An incorrect regression equation of equal difficulty is solved appropriately for the number of single-celled organisms.
- [1] Appropriate work is shown, but one conceptual error and one computational or rounding error are made.
- or***
- [1] The expression $27.2025(1.1509)^x$ is written, but no further correct work is shown.
- or***
- [1] 341, but no work is shown.
- [0] A zero response is completely incorrect, irrelevant, or incoherent or is a correct response that was obtained by an obviously incorrect procedure.
-

Part IV

For this question, use the specific criteria to award a maximum of 6 credits. Unless otherwise specified, mathematically correct alternative solutions should be awarded appropriate credit.

(39) [6] $\frac{-2(x^2 + 6)}{x^4}$ or $\frac{-2x^2 - 12}{x^4}$, and appropriate work is shown.

[5] Appropriate work is shown, but one computational, factoring, or simplification error is made.

[4] Appropriate work is shown, but two computational, factoring, or simplification errors are made.

or

[4] $\frac{(x^2 + 6)(x - 3)}{x(x - 4)} \cdot \frac{2(x - 2)}{x^3(x - 3)} \cdot \frac{-(x + 4)(x - 4)}{(x + 4)(x - 2)}$ or an equivalently factored expression, but no further correct work is shown.

[3] Appropriate work is shown, but three or more computational, factoring, or simplification errors are made.

or

[3] Appropriate work is shown, but one conceptual error is made.

[2] Appropriate work is shown, but one conceptual error and one computational, factoring, or simplification error are made.

[1] Appropriate work is shown, but one conceptual error and two or more computational, factoring, or simplification errors are made.

or

[1] $\frac{-2(x^2 + 6)}{x^4}$ or $\frac{-2x^2 - 12}{x^4}$, but no work is shown.

[0] A zero response is completely incorrect, irrelevant, or incoherent or is a correct response that was obtained by an obviously incorrect procedure.

Map to Core Curriculum

Content Strands	Item Numbers
Number Sense and Operations	6, 13, 30
Algebra	2, 3, 4, 5, 7, 8, 9, 10, 11, 14, 15, 16, 17, 18, 19, 22, 24, 25, 26, 27, 28, 29, 31, 33, 34, 35, 36, 37, 39
Measurement	20
Statistics and Probability	1, 12, 21, 23, 32, 38

Regents Examination in Algebra 2/Trigonometry

January 2012

Chart for Converting Total Test Raw Scores to Final Examination Scores (Scale Scores)

The Chart for Determining the Final Examination Score for the January 2012 Regents Examination in Algebra 2/Trigonometry will be posted on the Department's web site at: <http://www.p12.nysed.gov/apda/> on Wednesday, January 25, 2012. Conversion charts provided for previous administrations of the Algebra 2/Trigonometry examination must NOT be used to determine students' final scores for this administration.

Online Submission of Teacher Evaluations of the Test to the Department

Suggestions and feedback from teachers provide an important contribution to the test development process. The Department provides an online evaluation form for State assessments. It contains spaces for teachers to respond to several specific questions and to make suggestions. Instructions for completing the evaluation form are as follows:

1. Go to <http://www.forms2.nysed.gov/emsc/osa/exameval/reexameval.cfm>.
2. Select the test title.
3. Complete the required demographic fields.
4. Complete each evaluation question and provide comments in the space provided.
5. Click the SUBMIT button at the bottom of the page to submit the completed form.